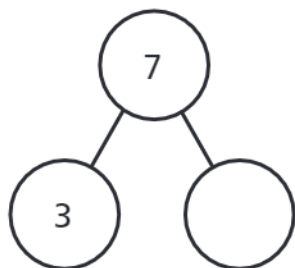


2 Complete the part-whole models and sentences.

a)

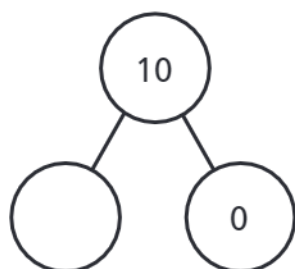


The whole is

is a part.

is a part.

b)




The whole is

is a part.

is a part.

3 There are 6 apples in total.

- 2 apples are green.
- The rest are red.



Colour the apples and complete the sentence.

$$2 + \boxed{} = 6$$

4 There are 8 shapes in total.

- 3 of the shapes are squares.
- The rest are circles.

Draw a picture to show this.

How many circles are there?

5 Complete the number sentences.

$$4 + \boxed{} = 5$$

$$\boxed{} + 1 = 4$$

$$4 + \boxed{} = 4$$

$$5 = \boxed{} + 4$$