

Daily 10

Mental Maths Challenge





We are consolidating what we know about tens and ones.



I could use my knowledge of tens and ones to problem solve.

I should be able to identify the tens and ones in a number.

I must recognise what number is shown in a part whole model.

Match each number to the correct picture.

15



16



17



18




19



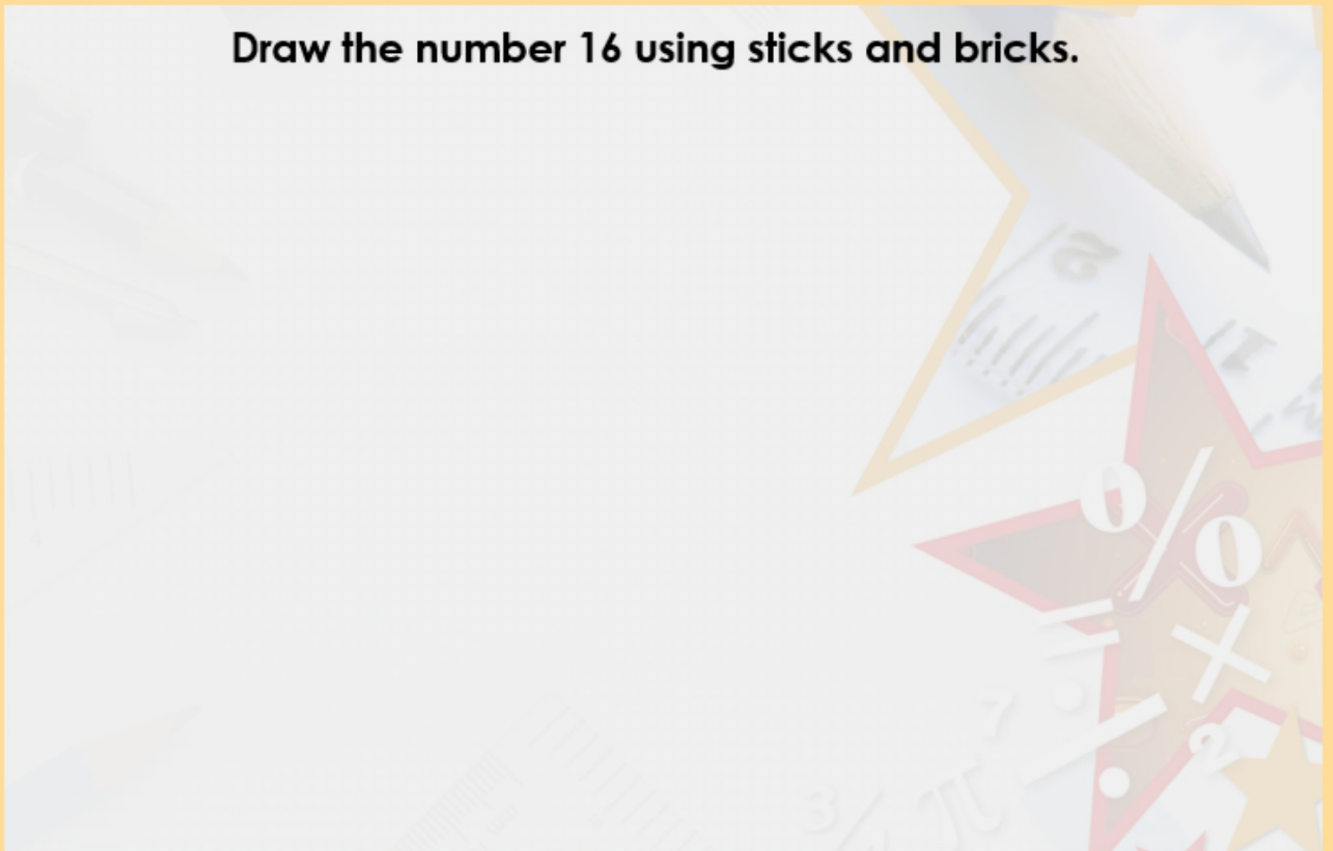
20



Circle 19.



Draw the number 16 using sticks and bricks.



True or false?

15



Match each number to the Base 10.

13

ten and  ones.

18

ten and  ones.

16

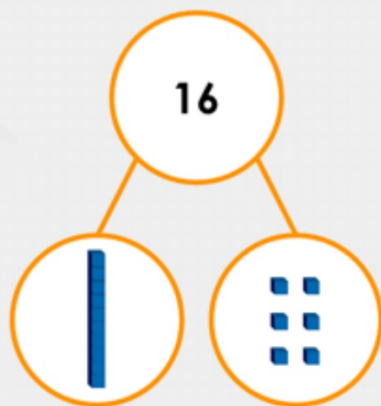
ten and  ones.

Fred is drawing the number 15. What is missing?



Which is the odd one out? Why?

A.



B.



C. 16 has 1 ten and 6 ones.

Sam and Dan are making the number 19.



Sam

We need 4 more ones.



Dan

We need 5 more ones.

Who is correct? Explain how you know.